
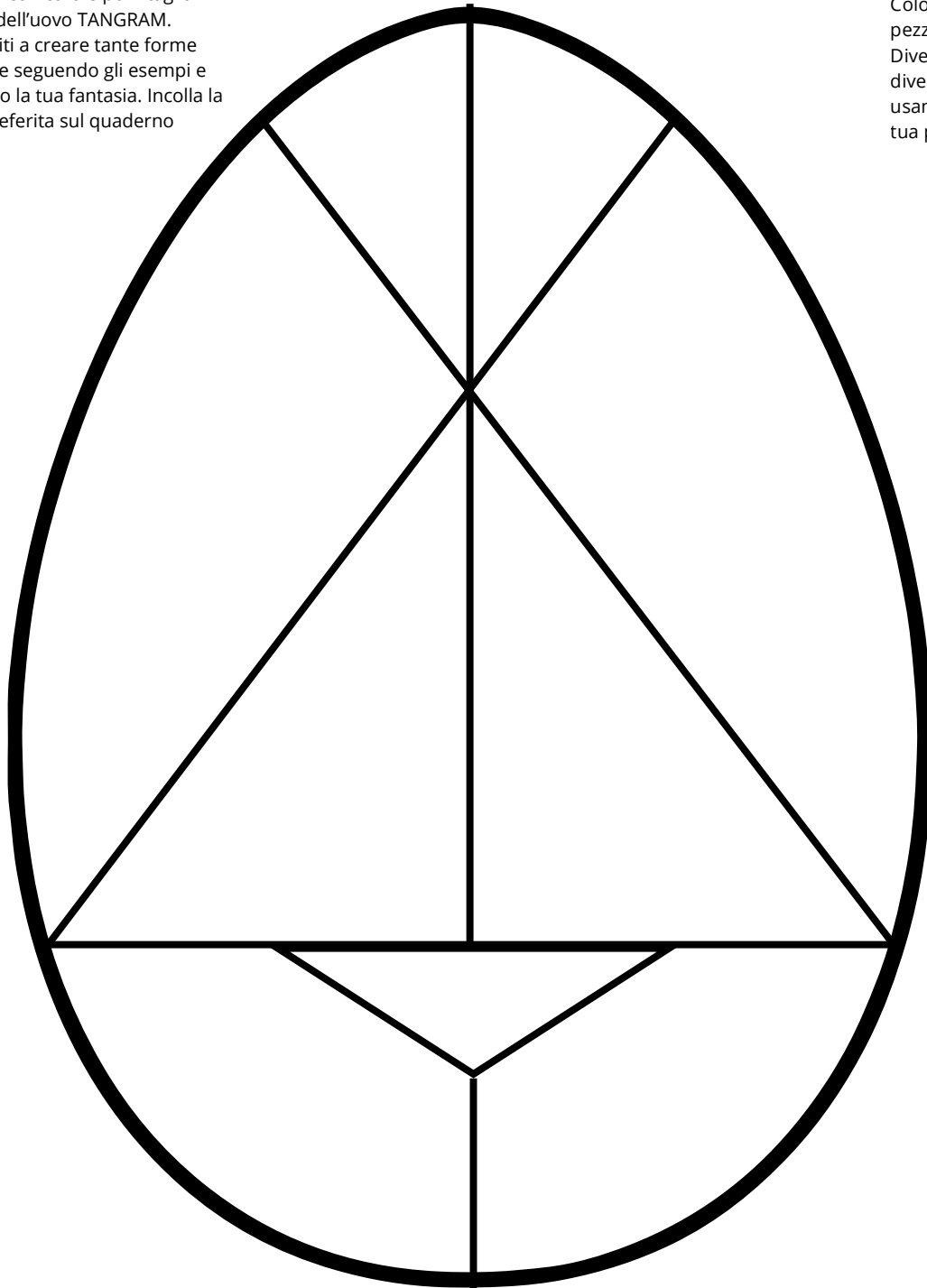


Calcola le moltiplicazioni e colora ogni spazio seguendo la legenda. Gli spazi con lo stesso risultato devono avere lo stesso colore. Poi colora gli spazi rimasti, ma **attenzione**: due spazi vicini non devono avere lo stesso colore!

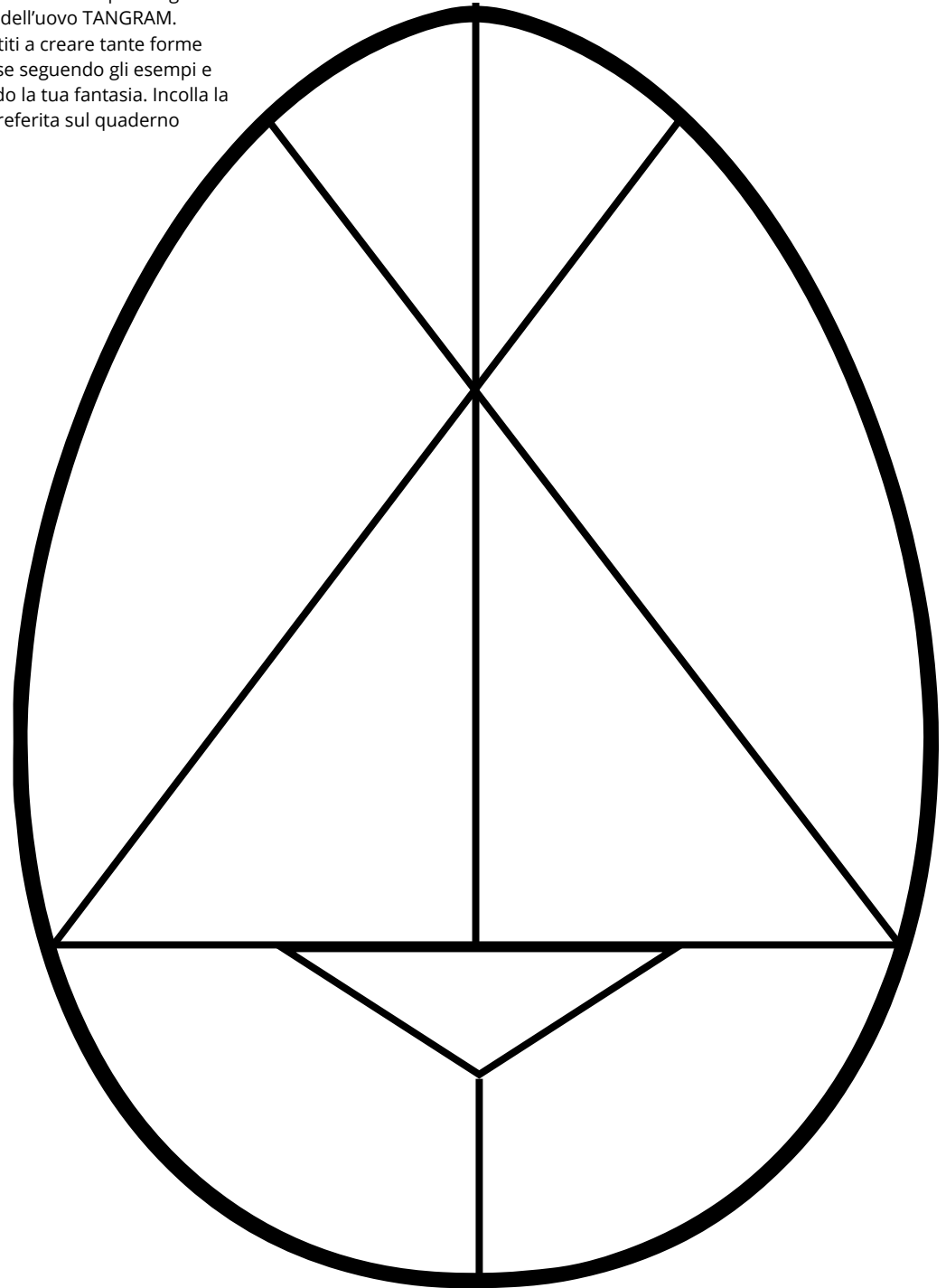
- 20 = GIALLO
- 8 = VERDE
- 6 = ROSA
- 24 = AZZURRO
- 32 = ROSSO
- 16 = ARANCIONE
- 40 = BLU



Colora con cura e poi ritaglia i pezzi dell'uovo TANGRAM. Divertiti a creare tante forme diverse seguendo gli esempi e usando la tua fantasia. Incolla la tua preferita sul quaderno



Colora con cura e poi ritaglia i pezzi dell'uovo TANGRAM. Divertiti a creare tante forme diverse seguendo gli esempi e usando la tua fantasia. Incolla la tua preferita sul quaderno



Mercoledì 8 aprile 2026

08/04/26

Mi metto alla prova

Multipli di 2

0-2-4-6-8-10-12-14-16-18-20

Multipli di 4

0-4-8-16-20-24-28-32-36-40

Multipli di 8

0-8-16-24-32-40-48-56-64-72-80

Un MIX di tabelline

$2 \times 4 =$

$2 \times 10 =$

$4 \times 5 =$

$4 \times 3 =$

$8 \times 2 =$



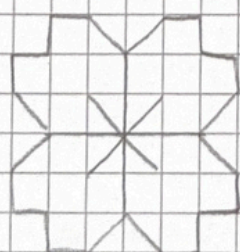

$5 \times 2 =$

$8 \times 3 =$

$10 \times 8 =$

$4 \times 8 =$


$8 \times 6 =$








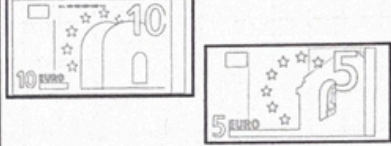




(corr. compiti)

Giovedì 9 aprile 2026

09/04/26


Spese di primavera 

COMPRO	PAGO CON	COSTO E RESTO
		<p>Costo + + =</p> <p>Resto 50 - =</p>
		<p>Costo + + =</p> <p>Resto - =</p>
		<p>Costo + + + =</p> <p>Resto - =</p>
		<p>Costo + =</p> <p>Resto - =</p>
		<p>Costo + + =</p> <p>Resto - =</p>

+SCIENZE

+INVALSI

La tabellina del 3



$$3 \times 0 = 0$$

$$3 \times 1 = 3$$

$$3 \times 2 = 6$$

$$3 \times 3 = 9$$

$$3 \times 4 = 12$$

$$3 \times 5 = 15$$

$$3 \times 6 = 18$$

$$3 \times 7 = 21$$

$$3 \times 8 = 24$$

$$3 \times 9 = 27$$

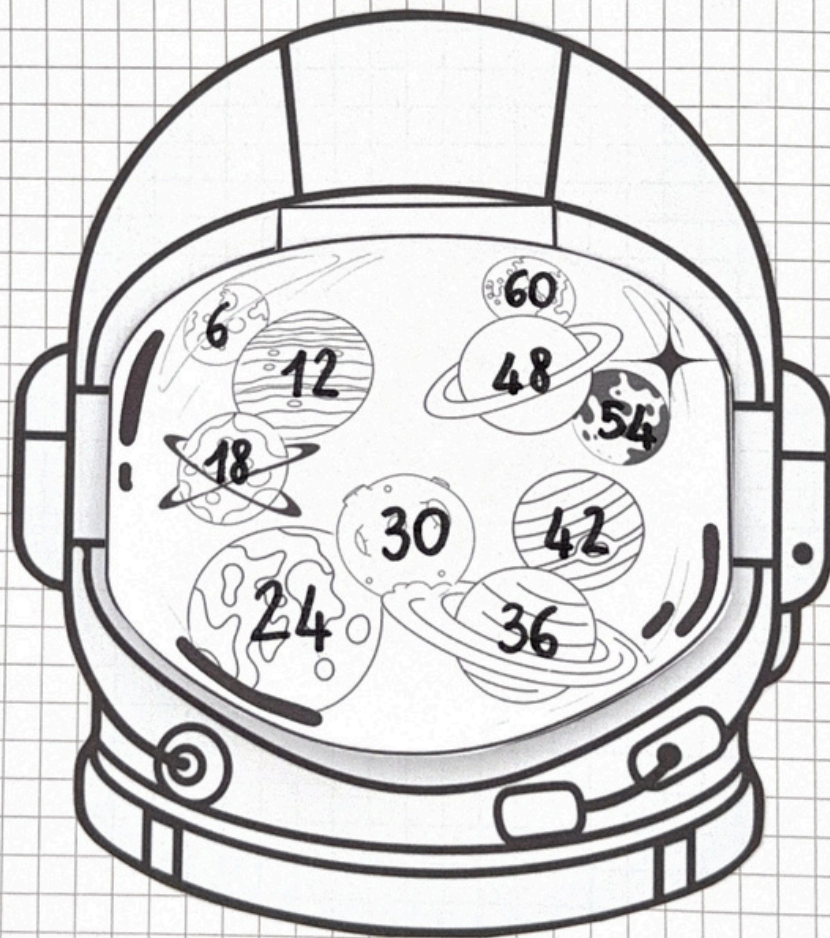
$$3 \times 10 = 30$$



Lunedì 20 aprile 2026


20/04/26


La tabellina del 6



- $6 \times 0 = 0$
- $6 \times 1 = 6$
- $6 \times 2 = 12$
- $6 \times 3 = 18$
- $6 \times 4 = 24$
- $6 \times 5 = 30$
- $6 \times 6 = 36$
- $6 \times 7 = 42$
- $6 \times 8 = 48$
- $6 \times 9 = 54$
- $6 \times 10 = 60$

Rappresentiamo la tabellina del 9 con il diagramma rettangolo.

 $9 \times 1 =$

 $9 \times 2 =$

 $9 \times 3 =$